

**RAFFLES GIRLS' PRIMARY SCHOOL**  
**2023 WEIGHTED ASSESSMENT 2**  
**MATHEMATICS**  
**PRIMARY 5**

Name: \_\_\_\_\_ (      )

Form Class: P5 \_\_\_\_\_

Math Teacher: \_\_\_\_\_

Date: 26 July 2023

Duration: 50 minutes

<b>Total Score</b> <b>(Out of 30 marks)</b>	
<b>Parent's Signature</b>	

**INSTRUCTIONS TO CANDIDATES**

1. Do not turn over this page until you are told to do so.
2. Follow all instructions carefully.
3. Answer **ALL** questions and show all working clearly.
4. The use of calculator is allowed for this paper.

Questions 1, 2 and 3 carry 1 mark each and Questions 4 to 11 carry 2 marks each. Show your working clearly and write your answers in the spaces provided. For questions which require units, give your answers in the units stated. [19 marks]

1. What is the missing number in the box?

$$6.514 = 6 + 0.5 + \boxed{?}$$

Ans: \_\_\_\_\_ [1]

2. Round 51.745 to 2 decimal places.

Ans: \_\_\_\_\_ [1]

3. Arrange the following decimals from the smallest to the greatest.

11.19, 11.9, 11.091

Ans: \_\_\_\_\_, \_\_\_\_\_, \_\_\_\_\_ [1]  
Smallest Greatest

4. Fill in the blanks.

a)  $85 \text{ ml} = \underline{\hspace{2cm}} \ell$

b)  $3 \text{ m } 70 \text{ cm} = \underline{\hspace{2cm}} \text{ cm}$

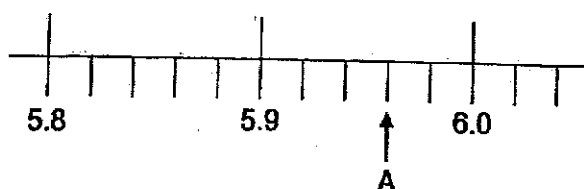
Ans: a)  $\underline{\hspace{2cm}} \ell$  [1]

b)  $\underline{\hspace{2cm}} \text{ cm}$  [1]

5. There were 50 children in the class. 18 of them were girls. What percentage of the children in the class were girls?

Ans:  $\underline{\hspace{2cm}} \%$  [2]

6. In the number line, what is the decimal represented by A?



Ans:  $\underline{\hspace{2cm}}$  [2]

7. Mr and Mrs Gomez took their 2 children to a museum. The price of an adult ticket was 3 times as much as a child ticket. They paid a total of \$146.40 for their tickets. What was the price of a child ticket?

Ans: \$ \_\_\_\_\_ [2]


8. Mdm Norah had \$56 000 in her bank account. The bank paid 6% interest at the end of each year. How much did she have in her bank account at the end of 1 year?

Ans: \$ \_\_\_\_\_ [2]

9. Gina bought 42 red flowers and 38 white flowers. What percentage of the flowers were red?


Ans: \_\_\_\_\_ % [2]

10. What is the price of the cupboard after adding 8% GST?



Ans: \$ \_\_\_\_\_ [2]

11. A fan cost \$55. Elle bought it at 40% discount. How much was the discount?



Ans: \$ \_\_\_\_\_ [2]

For questions 12 to 14, show your working clearly and write your answers in the spaces provided. The number of marks available is shown in brackets [ ] at the end of each question or part-question. [11 marks]

12. Susan has 2 rolls of ribbon of the same length but in different colours. She cuts the roll of blue ribbon into 4 equal pieces and the roll of red ribbon into 5 equal pieces. After cutting, each piece of blue ribbon is 1.85 m longer than each piece of red ribbon. What is the length of 1 roll of ribbon?

1 roll of  
blue ribbon



1 roll of  
red ribbon



Ans: \_\_\_\_\_ [3]

13. Dinesh saved a total of 132 pieces of 50-cent, 20-cent and 5-cent coins in his piggy bank. He had 5 fewer 50-cent coins than 20-cent coins. The number of his 5-cent coin was three times the total number of his 50-cent and 20-cent coins.

- a) How many 20-cent coins did Dinesh have?
- b) What was the total value of his 5-cent coins?

Ans: (a) \_\_\_\_\_ [2]

(b) \_\_\_\_\_ [2]

14. Davina uses triangles and circles to form figures that follow a pattern as shown below.

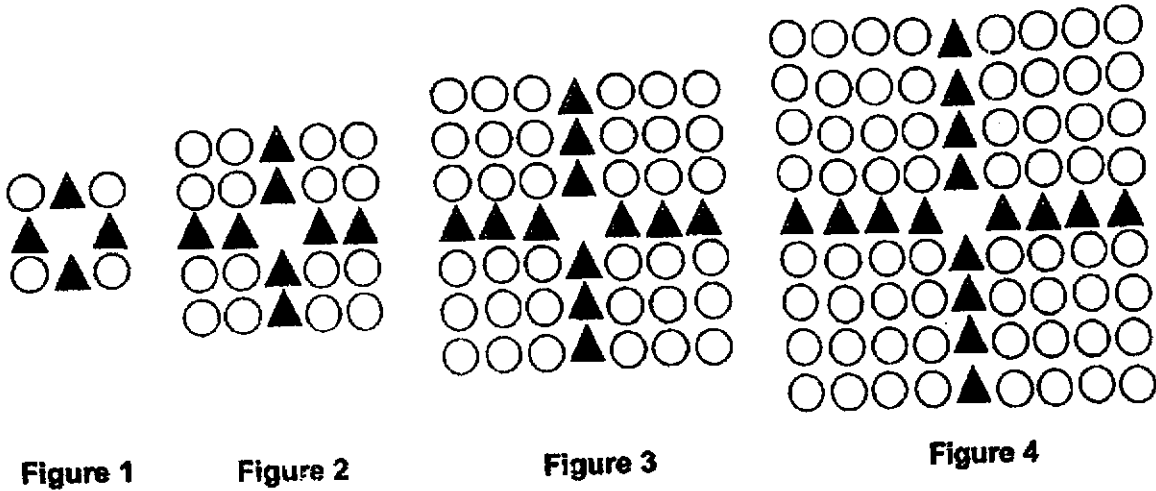


Figure 1

Figure 2

Figure 3

Figure 4

- a) The table shows the number of triangles and circles for the first four figures. Complete the table for Figure 5.

Figure Number	1	2	3	4	5
Number of triangles	4	8	12	16	
Number of circles	4	16	36	64	
Total number of triangles and circles	8	24	48	80	

[1]



- b i) What is the total number of triangles and circles in Figure 9?
- b ii) In Figure 9, what percentage of the total number of triangles and circles is the number of triangles?

Ans: (b i) \_\_\_\_\_ [2]

(b ii) \_\_\_\_\_ [1]

END OF PAPER



SCHOOL : RAFFLES GIRLS' PRIMARY SCHOOL  
 LEVEL : PRIMARY 5  
 SUBJECT : MATH  
 TERM : WA2 (2023)

Q1)	0.014
Q2)	51.75
Q3)	11.091, 11.19, 11.9
Q4)	a)0.085 L b)370cm
Q5)	36%
Q6)	5.96
Q7)	$146.40 \div 8 = \$18.30$
Q8)	$56000 \times 6\% = 3360$ $56000 + 3360 = \$59360$
Q9)	52.5%
Q10)	$360 \times 8\% = 28.8$ $360 + 28.8 = \$388.80$
Q11)	$55 \times 40\% = \$22$
Q12)	$1.85 \times 4 = 7.4$ $7.4 \times 5 = 37m$
Q13)	a)19 b)495
Q14)	a)20 , 100, 120 b)i) $9 \times 4 = 36$ $9 \times 9 \times 4 = 324$ $36 + 324 = 360$ ii) $36/360 \times 100\% = 10\%$

